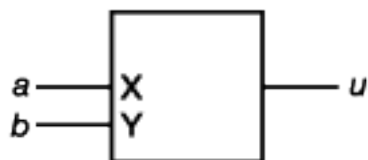
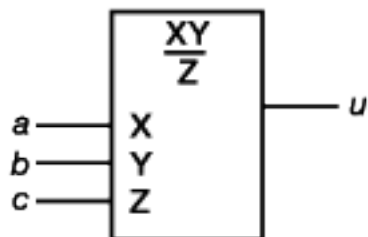


Illustrations



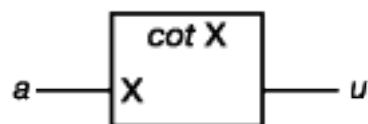
Multiplicateur

$$u = -2ab$$



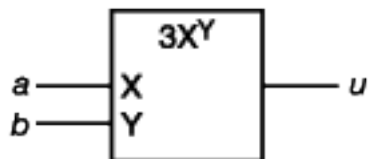
Multiplicateur-diviseur

$$u = \frac{ab}{c}$$



Fonction cotangente

$$u = \cot a$$



Fonction exponentielle

$$u = 3a^b$$